

Maths Activity Mat

3

Section 1

I have 5 pairs of shoes.

How many shoes is that altogether?



Section 2

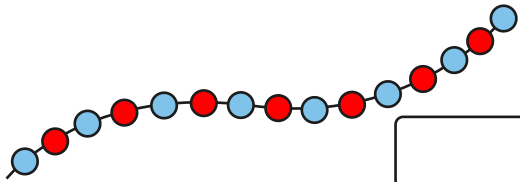
Shep had 5 dog biscuits.

Rover had 8. How many more biscuits did Rover have?



Section 3

Count the beads and write the number.




Section 4

I have got 30p.

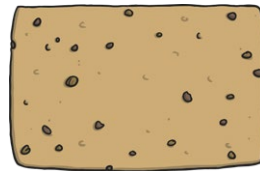
I lose 5p.

Write this as a number sentence:



Section 5

Cut the cake into quarters.



How many quarters equal a half?


Section 6

What numbers are missing?

40	35	30		20			5	0
----	----	----	--	----	--	--	---	---

Section 7

What time is it?



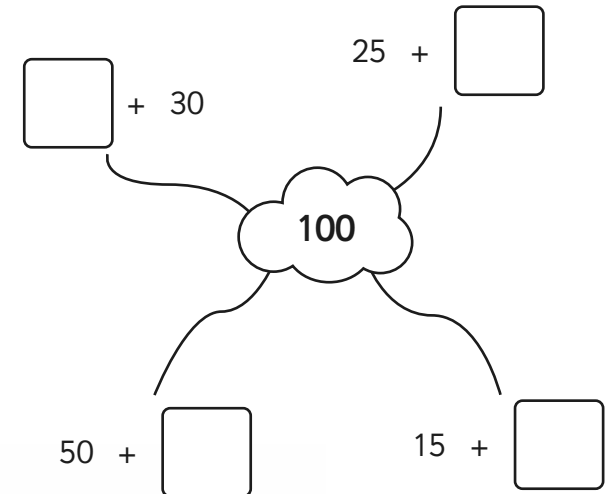
half past 5

ten to 6

ten to 5

Section 8

Complete the number pairs:



Maths Activity Mat: 3

Answers

Section 1

I have 5 pairs of shoes.

How many shoes is that altogether?




10

Section 4

I have got 30p.

I lose 5p.


Write this as a number sentence:



$$30 - 5 = 25$$

Section 7

What time is it?



half past 5

ten to 6

ten to 5

Section 2

Shep had 5 dog biscuits.

Rover had 8. How many more biscuits did Rover have?

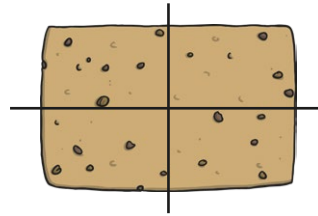


3

Section 5

Cut the cake into quarters.

For example:

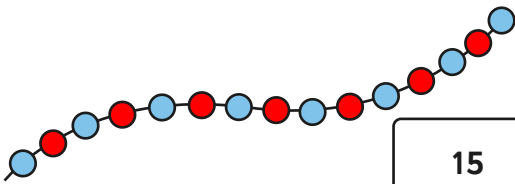


How many quarters equal a half?

2

Section 3

Count the beads and write the number.



15

Section 6

What numbers are missing?

40	35	30	25	20	15	10	5	0
----	----	----	----	----	----	----	---	---

Section 8

Complete the number pairs:

